

Ülesanne

Missugune mägede ja orgude muster tekib, kui voltida vastavalt allolevale juhendile?

Tõmba õigele vastusele ring ümber ja liigu vastava vastusnumbriga tähistatud koridori ning esita vastuseleht kohtunikule. Seal märgi kanuu kaardile KP, mille võtad hiljem vastavalt legendile!

NB! Märgi lehe paremasse ülemisse nurka ka võistkonna number!

Võistkonna number:

Team number:

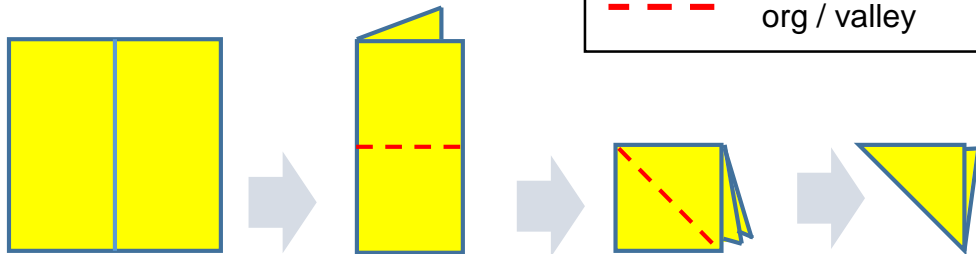
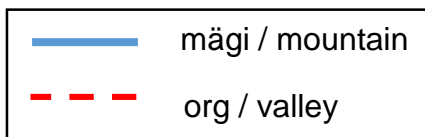


Task

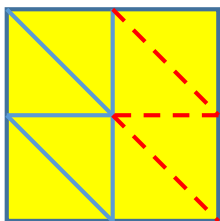
Which of the mountain-valley patterns would be made by executing these steps?

Circle the right answer and go to the corresponding corridor! Give this answer sheet to the referee. Draw the CP on the canoe map and mark it later as stated in the legend.

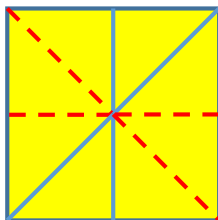
NB! Write your team number in the top-right corner.



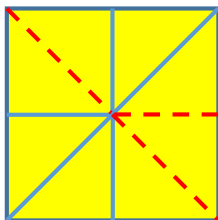
1)



2)



3)



4)

